







1 DOPLNÍM TABULKU.

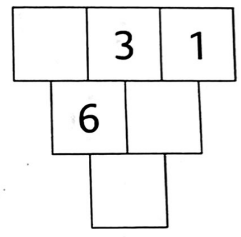
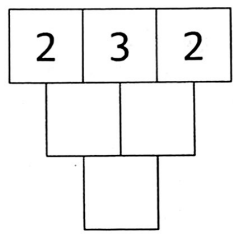
			
			
			
			



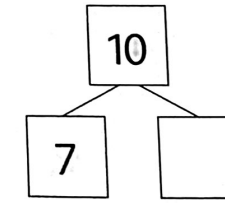
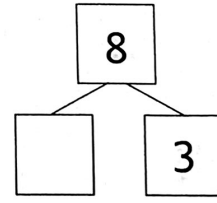
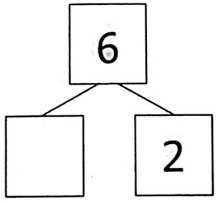
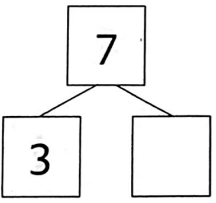
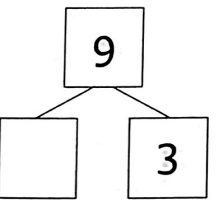
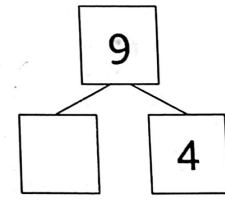
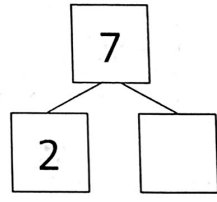
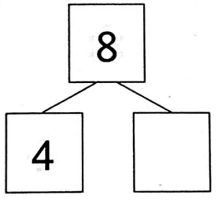
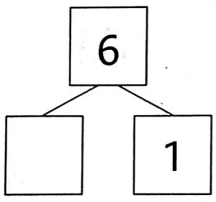
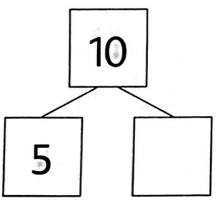
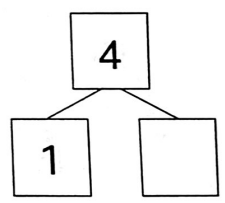
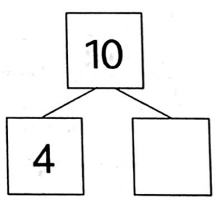
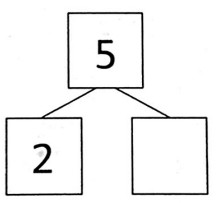
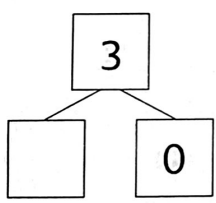
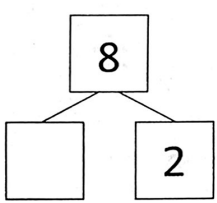
2 VYPOČÍTÁM.

$3 + 7 =$	<input type="text"/>	$11 - 1 =$	<input type="text"/>
$8 + 3 =$	<input type="text"/>	$11 - 3 =$	<input type="text"/>
$9 + 2 =$	<input type="text"/>	$9 - 5 =$	<input type="text"/>
$6 + 4 =$	<input type="text"/>	$10 - 6 =$	<input type="text"/>
$5 + 2 =$	<input type="text"/>	$10 - 4 =$	<input type="text"/>
$6 + 3 =$	<input type="text"/>	$8 - 5 =$	<input type="text"/>

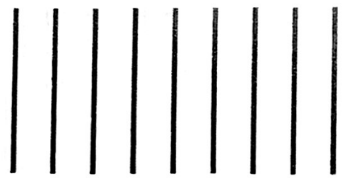
3 DOPLNÍM ČÍSLA.



1 ROZDĚLÍM.



2 MÁM 9 DŘÍVEK. SKLÁDÁM \triangle A ZAKRESLÍM.



1 VYŘEŠÍM SLOVNÍ ÚLOHY.

A) JANA MÁ 2 MÍČE.
PEPA MÁ 1 MÍČ.
KOLIK MÍČŮ MAJÍ DOHROMADY?



DOHROMADY MAJÍ _____ MÍČE.

KDO MÁ VÍCE?

VÍCE MÁ _____.

B) ÁLA MÁ 3 BONBÓNY.
MÍLA MÁ 5 BONBÓNŮ.
KOLIK BONBÓNŮ MAJÍ DOHROMADY?







DOHROMADY MAJÍ _____ BONBÓNŮ.

KDO MÁ VÍCE?

VÍCE MÁ _____.

2 KOLIK JE ZDE ? DOKRESLÍM A ZAPÍŠU.



1 KROKUJI A VYŘEŠÍM.

→→→ | ← = → | _____

→→→ | ← = →→→→ | _____ | ←

_____ | →→→ | ← = →→→ | ←←

→→→→ | ←← = → | ←← | _____

→ | _____ | ← = →→→ | ←

←← | _____ | → = →→ | → | ←←

2 ZAPÍŠU PLÁN STAVBY NEBO VYTVOŘÍM STAVBU.

3 DOPLNÍM TABULKU.

podlaží	□	○	△	*
3.				
2.				
1.				